

# Draw the time: *whole hours*


Draw the correct time on the clock face. The first one has been done for you.



08:00



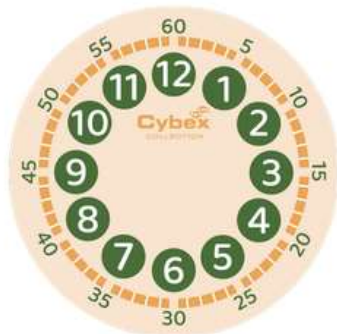
06:00



03:00



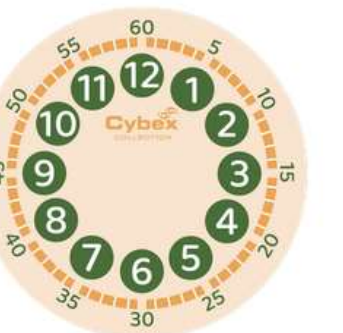
01:00



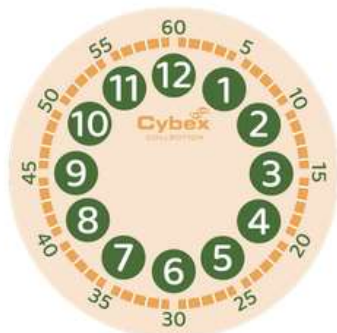
05:00



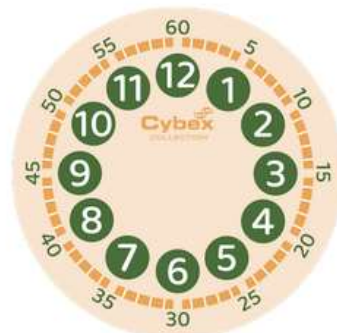
12:00



04:00



02:00



11:00

# Draw the time: *half past (30 mins)*

Draw the correct time on the clock face. The first one has been done for you.



08:30



06:30



03:30



01:30



05:30



12:30



04:30



02:30



11:30

# Draw the time: *quarter past (15 mins)*

Draw the correct time on the clock face. The first one has been done for you.



02:15



07:15



10:15



01:15



06:15



12:15



08:15



02:15



09:15

# Draw the time: *quarter to (45 mins)*

Draw the correct time on the clock face. The first one has been done for you.



02:45



07:45



10:45



11:45



09:45



12:45



08:45



02:45



06:45

# Draw the time: *quarter and half*

Draw the correct time on the clock face. The first one has been done for you.



02:45



02:15



02:30



11:45



11:15



11:30



08:45



08:15



08:30

# Draw the time: 5 minutes interval

Draw the correct time on the clock face. The first one has been done for you.



02:05



12:20



03:50



11:55



08:25



06:05



07:40



01:10



04:35

# Draw the time: *1 minute interval*

Draw the correct time on the clock face. The first one has been done for you.



11:11



12:22



03:47



10:54



08:16



06:57



07:42



01:18



04:38