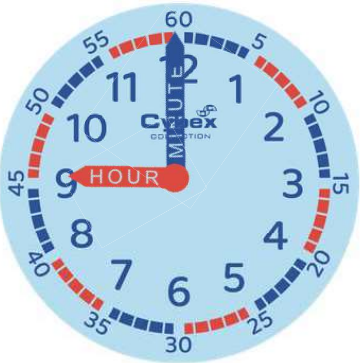

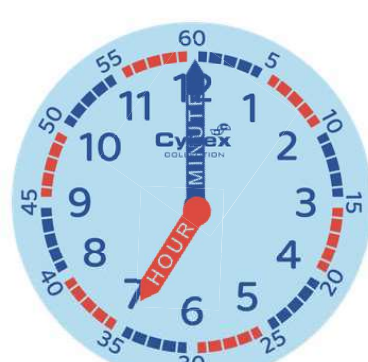
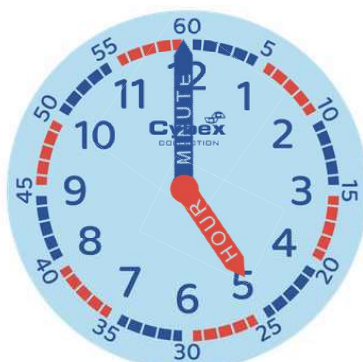
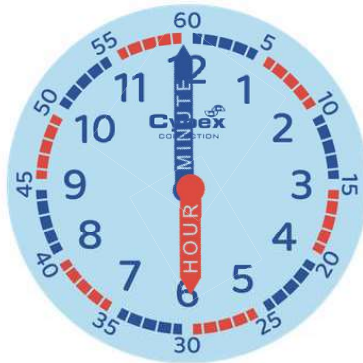
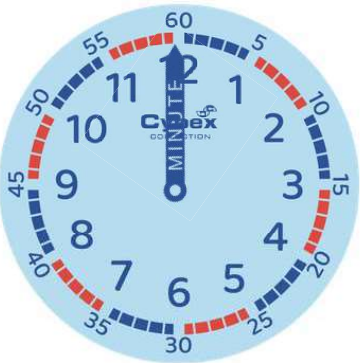


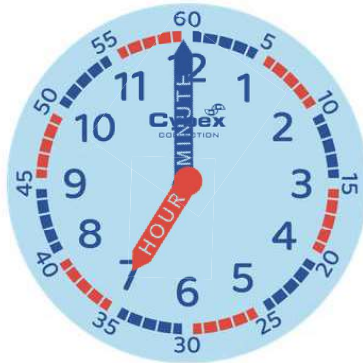


# Telling time: *whole hours*

Write the correct time underneath each clock. The first one has been done for you.



09:00



# Telling time: *half past* (30mins)

Write the correct time underneath each clock. The first one has been done for you.



02:30 or  
*half past 2*



# Telling time: *quarter past* (15mins)

Write the correct time underneath each clock. The first one has been done for you.



02:15 or  
*quarter past 2*










# Telling time: *quarter to* (15mins)

Write the correct time underneath each clock. The first one has been done for you.



01:45 or  
*quarter to 2*



# Telling time: *quarter and half*

Write the correct time underneath each clock. The first one has been done for you.




01:45 or  
*quarter to 2*



01:15 or  
*quarter past 1*



01:30 or  
*half past 1*



# Telling time: 5 minutes interval

Write the correct time underneath each clock. The first one has been done for you.



09:05



# Telling time: 1 minute interval

Write the correct time underneath each clock. The first one has been done for you.



09:07

